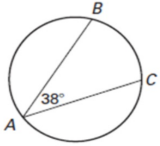


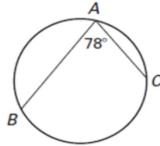
Student Practice:

Find the measure of the indicated arc or angle.

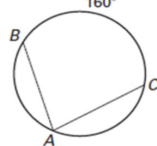
1. $m\widehat{BC} = \underline{\quad ? \quad}$



2. $m\widehat{BC} = \underline{\quad ? \quad}$



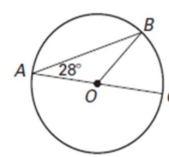
3. $m\angle BAC = \underline{\quad ? \quad}$



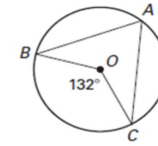
Student Practice:

Find the measure of the indicated arc or angle.

4. $m\widehat{BC} = \underline{\quad ? \quad}$

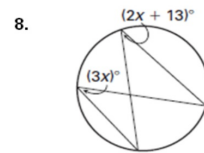
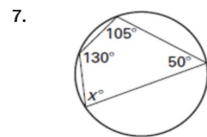
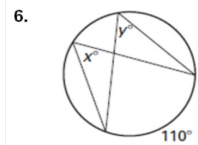


5. $m\angle BAC = \underline{\quad ? \quad}$



Student Practice:

Find the value of each variable.



Student Practice:

Find the value of each variable.

