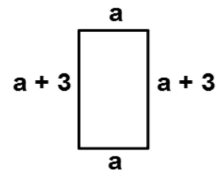


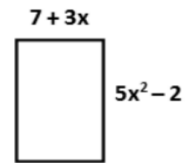
**Application of Multiplication:**

**Find the Area of the following:**

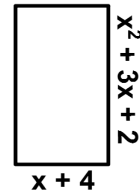
**Ex. 1**



**Ex. 2**



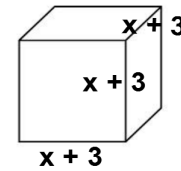
**Ex. 3**



**Application of Multiplication:**

**Find the Volume of the following:**

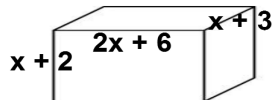
**Ex. 4**



**Application of Multiplication:**

**Find the Volume of the following:**

**Ex. 5**



**Application of Multiplication:**

**Find the Area of the Shaded Region:**

**Ex. 6**

