

Name _____

Hour _____

Date _____

IRrational or RATIOal???

Directions: Follow the steps below. Use a QR code scanner (such as i-nigma) to scan when instructed and read/watch the designated content. Good luck!






1. Scan the code to the right and watch the video that introduces rational and irrational numbers. This is what we will be discussing in class tomorrow.
2. Use the table below to complete 10 practice problems. Is each value rational or irrational? Scan the code that you believe to be correct. The link will either confirm that you are correct or explain the correct answer. Be sure to watch every video thoroughly. (Hint: Be careful to scan the exact code you want.)

Rational	Practice	Irrational
	1. $\sqrt{25}$	
	2. π	
	3. 3.33333...	
	4. 0.175	
	5. $\sqrt{7/4}$ $\sqrt{7/4}$	
	6. -16	

Name _____

Hour _____

Date _____

Rational	Practice	Irrational
	7. $\sqrt{32}$	
	8. $\frac{2}{3}$	
	9. 31	
	10. 0.12345...	

3. Use the links below if you still need help or want to make sure you are prepared for class tomorrow. See you then!



Help Video #1



Irrational Rap



Help Video #2