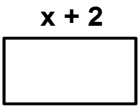




Application of Multiplication: Student Practice

Find the Area of the following:

1.  $x - 1$ $x + 2$ $x - 1$ $x + 2$
2.  x^2 x x^2 x
3.  $4z + 3$ $4z + 3$

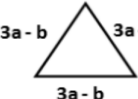
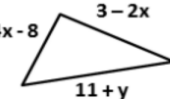

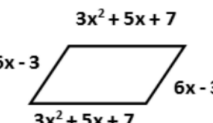
Application of Multiplication: Student Practice

Find the Volume of the following:

4.  $x + 4$ x $2x + 3$
5.  $x + 5$ $x + 5$ $x + 5$

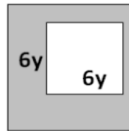
Application of Multiplication: Student Practice

Find the Perimeter of the following:

6.  $3a - b$ $3a - b$ $3a - b$
7.  $4x - 8$ $3 - 2x$ $11 + y$
8.  $4z + 3$ $4z + 3$
9.  $3x^2 + 5x + 7$ $6x - 3$ $6x - 3$ $3x^2 + 5x + 7$

Application of Multiplication: Student Practice

Find the Area of the shaded region:

10.  $11y$ $6y$ $6y$ $11y$