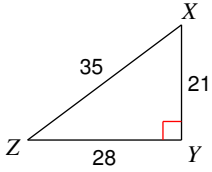


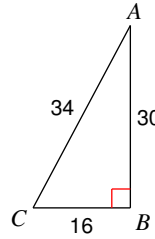
## Trigonometric Ratios

Find the value of each trigonometric ratio.

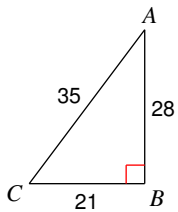
1)  $\tan Z$   $\frac{3}{4}$



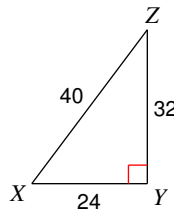
2)  $\cos C$   $\frac{8}{17}$



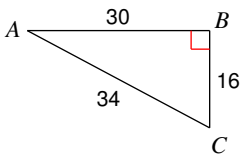
3)  $\sin C$   $\frac{4}{5}$



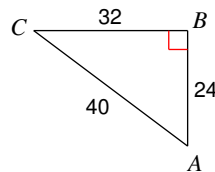
4)  $\tan X$   $\frac{4}{3}$



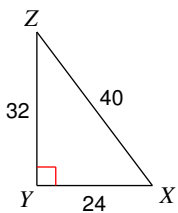
5)  $\cos A$   $\frac{15}{17}$



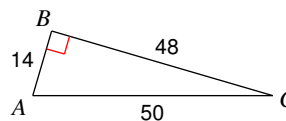
6)  $\sin A$   $\frac{4}{5}$



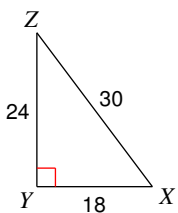
7)  $\sin Z$   $\frac{3}{5}$



8)  $\sin C$   $\frac{7}{25}$



9)  $\cos Z$   $\frac{4}{5}$



10)  $\tan C$   $\frac{3}{4}$

