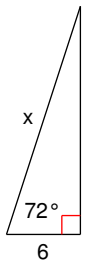


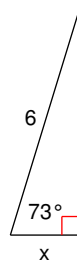
### Solving Right Triangles

**Find the missing side. Round to the nearest tenth.**

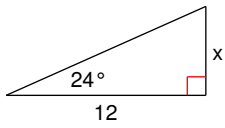
1)



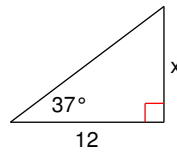
2)



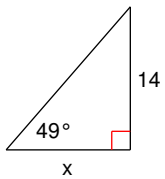
3)



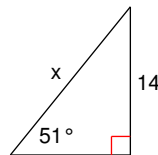
4)



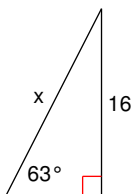
5)



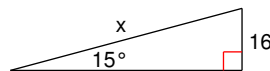
6)



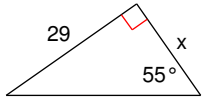
7)



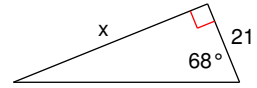
8)



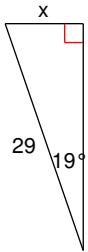
9)



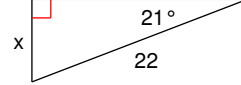
10)



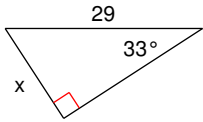
11)



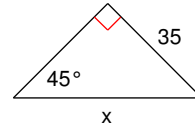
12)



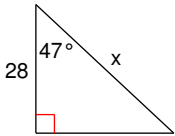
13)



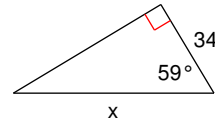
14)



15)



16)



**Critical thinking question:**

17) Write a new problem that is similar to the others on this worksheet. Solve the question you wrote.