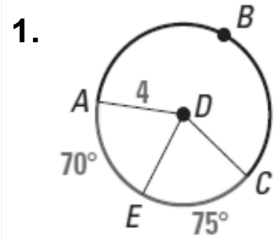
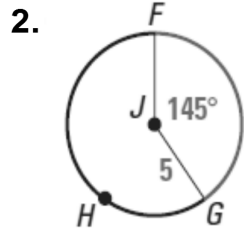


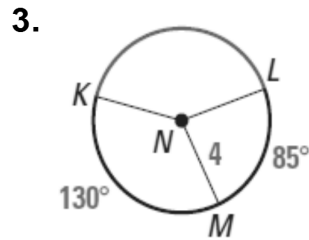
FINDING ARC MEASURES Find the measure of the red arc.



$m \widehat{AC} = \underline{\hspace{2cm}}$

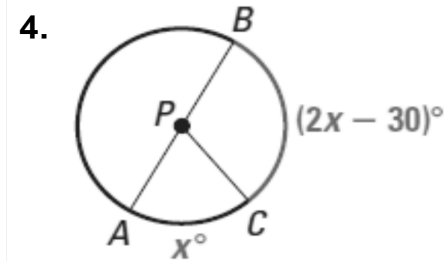


$m \widehat{GF} = \underline{\hspace{2cm}}$

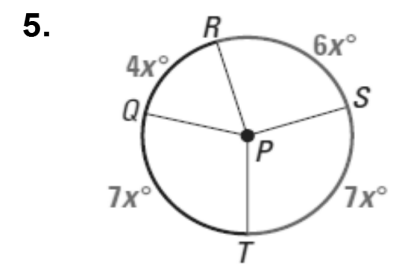


$m \widehat{KL} = \underline{\hspace{2cm}}$

FINDING ARC MEASURES Solve for x and then find the measure of the red arc.

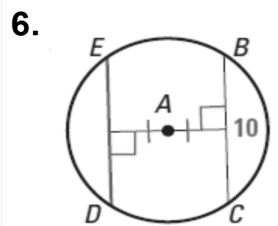


$m \widehat{BC} = \underline{\hspace{2cm}}$

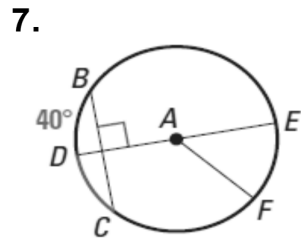


$m \widehat{RST} = \underline{\hspace{2cm}}$

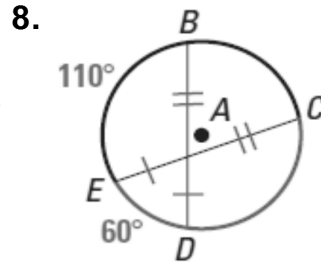
MEASURING ARCS AND CHORDS Find the measure of the red arc or chord



$m \overline{ED} = \underline{\hspace{2cm}}$



$m \widehat{DC} = \underline{\hspace{2cm}}$



$m \widehat{EDC} = \underline{\hspace{2cm}}$

MEASURING ARCS AND CHORDS Find the value of x in $\odot C$.

