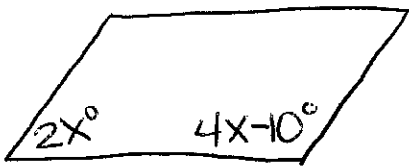


①



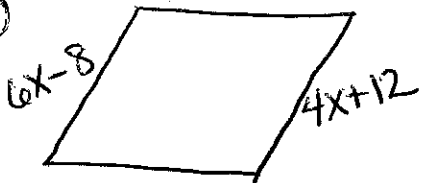
parallelogram  
solve for x.

②



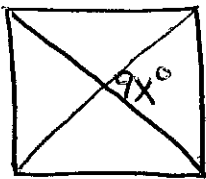
Rectangle  
solve for x.

③



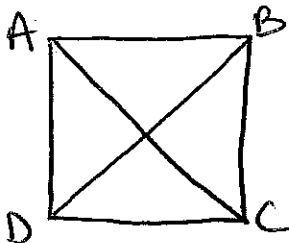
Rhombus  
solve for x.

④



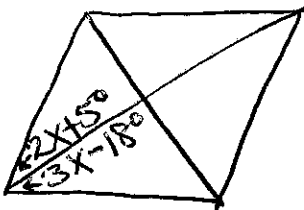
Square  
solve for x.

⑤



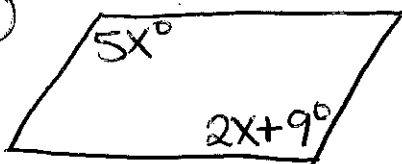
square  
 $AC = 10x - 2$   $BD = 5x - 7$   
solve for x.

⑥



Rhombus  
solve for x.

⑦



parallelogram  
solve for x.

Name : \_\_\_\_\_