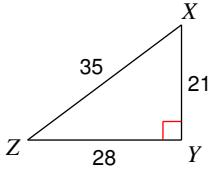


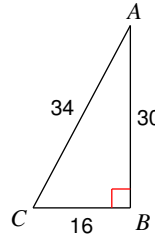
# Trigonometric Ratios

**Find the value of each trigonometric ratio.**

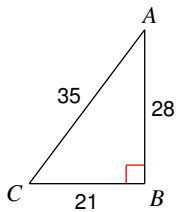
1)  $\tan Z$



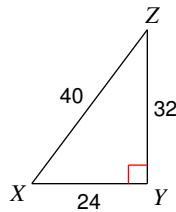
2)  $\cos C$



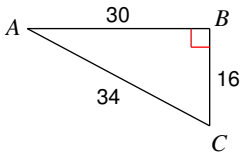
3)  $\sin C$



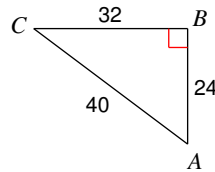
4)  $\tan X$



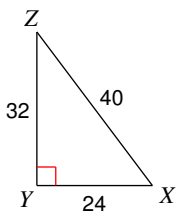
5)  $\cos A$



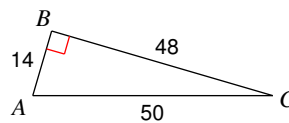
6)  $\sin A$



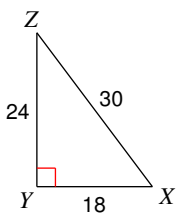
7)  $\sin Z$



8)  $\sin C$



9)  $\cos Z$



10)  $\tan C$

